

## Bhatnagar International Foundation School

### Grade 2 - Winter Holiday Homework



Dear Children,

We wish you all a Merry Christmas and a Happy New Year!

Let us thank the Almighty God for all his blessings and for keeping us safe and healthy this year.

The winter break brings to mind festivities, fun, frolic and much needed relaxation. It is the perfect time to spend quality time with our lovely family. Take good care of yourself, eat healthy food, exercise daily and read as many story books as you can. So, enjoy your holidays, sleep some more in the morning, drink hot soups and have lot of fun!

Along with all the merriment and the fun-filled days, do revise the lessons and concepts learnt in class and practice the attached worksheets.



Kindly take note of the following points:

- Student's name should be mentioned on the homework booklet before submitting it to the class teacher.
- Engage yourself in a productive activity like writing a journal or a letter to your loved ones.
- "Knowledge is Power". Therefore, read lots and lots of books to cultivate the reading habit and develop your vocabulary, language skills, increase your attention span and improve your spellings.
- "A healthy mind lives in a healthy body". So play the sport of your choice **INDOORS**. It will help to instil discipline, generate sporting spirits and channelize your energies constructively.
- Revise tables from 2 to 10.

**BHATNAGAR INTERNATIONAL FOUNDATION SCHOOL**

**Winter Break Holiday Homework**

**Name:** \_\_\_\_\_ **Grade II Sec** \_\_\_\_\_ **Date:** \_\_\_\_\_

Q1. Read the following passage and answer the questions:

**The Cap seller and the Monkeys**

It was a hot day. A cap seller was going to a fair to sell his caps. His way lay through a thick forest and he was so tired, so he decided to take some rest under a big shady tree. Soon he was fast asleep. There lived many monkeys on the tree. They saw him wearing a cap on his head. They came down, opened his bundle, and took the caps and wore them on their heads. Then they climbed up on the high branches of the tree. After some time, the cap seller woke up. He found that his caps were not there. The caps were missing. He felt very gloomy and looked around for them. All of a sudden, he looked up and saw the monkeys wearing the caps. An idea struck his mind. He at once took off his own cap and threw it on the ground. He knew that monkeys are good imitators. The monkeys also threw their caps down. He collected all his caps and went his way to the fair.

Answer each question.

1. Why was the cap seller going to the fair?

---

---

2. What did the cap seller decide to do?

---

---

---

3. There lived many monkeys on the tree.

a. True    b. False

4. What did the monkeys do?

---

---

---

---

5. What was the cap seller's idea?

---

---

---

---

Q2. Circle the adjectives and underline the nouns they describe.

1. The young boy helped his father to wash the dirty car.
2. The pretty girl twirled in her new dress.
3. The clean windows shone in the sunlight.
4. Mary put her blue pencil, her red marker and her sharpener back in her pencil case.
5. The green grass grows under the warm sun of summer.
6. His yellow pyjamas were so long that they dragged on the floor.

Q3. Circle the verbs in the sentences.

1. Bill helped Tina with her homework.
2. My dad looked very happy when he got an award.
3. I packed myself a snack for after school.
4. The dog barked at the cat in the tree.
5. My mom framed the picture that I drew.
6. The teacher explained present tense and past tense.
7. The waiter served us lemonade and French fries.
8. Cathy raises chickens for their eggs.
9. My brother opened his laptop computer to check his mail.
10. We all watched the last game together.

#### Q4. Picture reading

Write few lines about the picture below. You may use the words in boxes to help.

Joyful , crispy chips, colourful jellies, delicious pastries, games, balloons, glittery streamers

This image shows a single sheet of white paper with horizontal ruling lines. The lines are evenly spaced and run across the width of the page. There are no margins, text, or other markings on the paper.

# Practice Worksheet – 1

Name: \_\_\_\_\_

Section: \_\_\_\_\_

Date: \_\_\_\_\_

Q1. Fill in the blanks:

- $6 \times 8 = 40 + \underline{\hspace{2cm}}$
- Seven fours =  $\underline{\hspace{2cm}}$
- $11 + 9 = 5 \times \underline{\hspace{2cm}}$
- How many wheels are there on 6 cars? =  $\underline{\hspace{2cm}}$
- $635 + \underline{\hspace{2cm}} = 243 + 635$

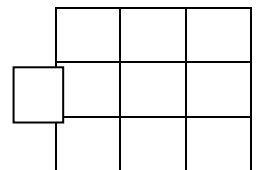
Q2. Solve the following:

<p>(g)</p> $\begin{array}{r} \text{T O} \\ 28 \\ \times \quad 2 \\ \hline \end{array}$	<p>(h)</p> $\begin{array}{r} \text{H T O} \\ 368 \\ + 521 \\ \hline \end{array}$	<p>(i)</p> $\begin{array}{r} \text{T O} \\ 32 \\ \times \quad 7 \\ \hline \end{array}$
<p>(j)</p> $\begin{array}{r} \text{H T O} \\ 753 \\ + 208 \\ \hline \end{array}$	<p>(k)</p> $\begin{array}{r} \text{T O} \\ 86 \\ \times \quad 3 \\ \hline \end{array}$	<p>(l)</p> $\begin{array}{r} \text{T O} \\ 54 \\ + 36 \\ \hline \end{array}$

Q3. Find:

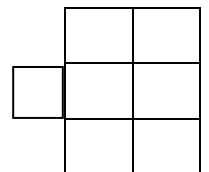
- a) Charu had 290 rupees. Her father gave her 135 rupees more. How much money does Charu have now?

Answer: \_\_\_\_\_  
\_\_\_\_\_



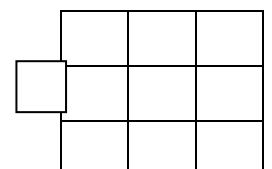
- b) Mary has 17 yellow balloons. She lost 5 out of them. How many yellow balloons does she have now?

Answer: \_\_\_\_\_  
\_\_\_\_\_



- c) The capacity of a drum is 60 liters of milk. How much milk can be collected in 7 such drums?

Answer: \_\_\_\_\_  
\_\_\_\_\_



# Practice Worksheet – 2

Q1. Fill in the blanks:

- What is double of 20? \_\_\_\_\_
- What will you take away from 20 to get 10? \_\_\_\_\_
- 199 is 1 less than \_\_\_\_\_
- Take away 7 tens from 10 tens. \_\_\_\_\_
- 45, 35, 25, 15, \_\_\_\_\_

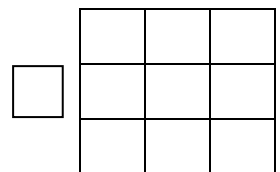
Q2. Solve the following:

<p>(a)</p> $\begin{array}{r} \text{T} \quad \text{O} \\ 4 \quad 8 \\ - 2 \quad 9 \\ \hline \end{array}$	<p>(b) <math>36 \div 6 =</math></p>	<p>(c)</p> $\begin{array}{r} \text{T} \quad \text{O} \\ 8 \quad 8 \\ - 3 \quad 9 \\ \hline \end{array}$
<p>(d)</p> $\begin{array}{r} \text{H} \quad \text{T} \quad \text{O} \\ 9 \quad 0 \quad 7 \\ - 3 \quad 4 \quad 5 \\ \hline \end{array}$	<p>(e)</p> $\begin{array}{r} \text{H} \quad \text{T} \quad \text{O} \\ 3 \quad 5 \quad 8 \\ - 1 \quad 7 \quad 0 \\ \hline \end{array}$	<p>(f) <math>72 \div 9 =</math></p>

Q3. Find

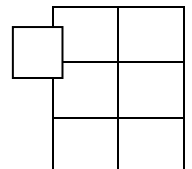
- A book has 468 pages. Varsha read 279 of them. How many pages are left to be read?

Answer: \_\_\_\_\_  
 \_\_\_\_\_



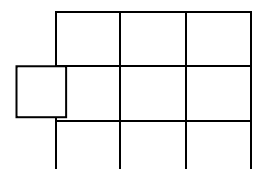
- In a class each child has 4 notebooks. If there are 24 Children, How many notebooks are there in total?

Answer: \_\_\_\_\_  
 \_\_\_\_\_



- Lucy went to a grocery store. She bought 120 packets of cookies and 75 packets of noodles. How many packets did she buy in all?

Answer: \_\_\_\_\_  
 \_\_\_\_\_



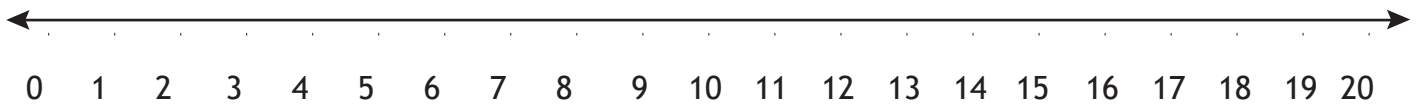
# Practice Worksheet – 3

Q1. Fill in the blanks:

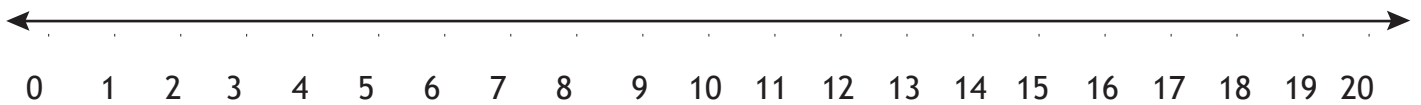
- a. Even number more than 12 but less than 16 \_\_\_\_\_
- b. How many bananas are there in a dozen? \_\_\_\_\_
- c. 10 tens and 10 ones \_\_\_\_\_
- d. How many 3's are there in 21? \_\_\_\_\_
- e. Subtract 20 l from 50 l
- f. \_\_\_\_\_ cm = 5 m

Q2. Solve the following on a number line:

a.  $16 \div 4 =$  \_\_\_\_\_



b.  $3 \times 5 =$  \_\_\_\_\_



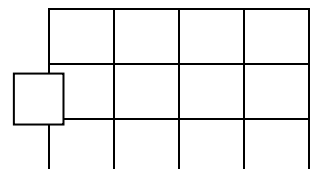
Q3. Find

- a. A shopkeeper put 36 apples into 4 baskets. How many apples are there in each basket?

Answer: \_\_\_\_\_  
\_\_\_\_\_


- b. There were 607 cars in a parking lot. 188 cars left the parking lot. How many cars are there in total now?

Answer: \_\_\_\_\_  
\_\_\_\_\_



- c. The weight of Mohan is 28 kg and weight of his sister is 17 kg. Find their total weight.

Answer: \_\_\_\_\_  
\_\_\_\_\_





प्र.1 – दिए गये शब्दों के वचन बदलो .

1. पुस्तक 5 ----- . दिया -----
2. लकड़ी 6 ----- . चिड़िया -----
3. केला 7 ----- . कपडा -----
4. पौधा 8 ----- . चश्मा -----

प्र.2 – दिए गये चित्रों को पहचानकर पर्यायवाची शब्द लिखो .



1.



2.



3.



प्र.3 सही मिलान करो .

अ

ब

१. खाली

उजाला

२. ऊपर

भरा

३. अँधेरा

छाया

४. ठंडा

नीचे

५. धूप

गर्म

प्र .4 .दिए गये चित्र को पहचानकर उसपर पांच वाक्य लिखो -



---

---

---

---

---

---

---

---

---

---

# Computers

Q 1- Rearrange the following jumbled letters to correct words with the help of the clues provided.

1- SEMUO

--	--	--	--	--

Clue- To give input to the computer

2- RESACNN

--	--	--	--	--	--	--

Clue-Input device used to give output on monitor

3- RIOMONT

--	--	--	--	--	--	--

Clue- To display the result

4-TRPRINE

--	--	--	--	--	--	--

Clue- To give output on the paper

5- YKADRBEQ

--	--	--	--	--	--	--	--

Clue- Most commonly used "Input" device.

6- REKAPSES

--	--	--	--	--	--	--	--

Clue- Output device used for sound

7-CROMPIOENH

--	--	--	--	--	--	--	--	--	--

Clue- Input device used for sound

8- TIJCOSKY

--	--	--	--	--	--	--	--

Clue- Input device helps to play games .

Q 2- Make a Birth day card on Tux Paint:

Tools that will be used –

1- Shapes

2- Paint

3- Magic Tools

4- ABC Text

5- Fill Color

# **Environmental Studies**

**A. UTTARAYAN / KITE / MAKAR SANKRANTI FESTIVAL** The festival of Uttarayan marks the day when winter begins to turn into summer, according to the Indian calendar. It is the sign for farmers that the sun is back and that harvest season is approaching which is called Makara Sankranti. This day is considered to be one of the most important harvest day in India. Many cities of Gujarat organize kite competition for their citizens where the people compete with each other. So students get ready to make your own kite. For making your kite you need to use geometrical patterns. Keep the dimensions 10"x10" to proceed to the next activity.

Follow the link given below to make a beautiful kite under your parents guidance

<https://www.wikihow.com/Make-an-Easy-Kite>

[http://www.ncert.nic.in/pdf\\_files/Loveneet\\_kumari.pdf](http://www.ncert.nic.in/pdf_files/Loveneet_kumari.pdf)

You may require the following:

- a. Glue
- b. Ribbon
- c. Twine
- d. Bamboo Dowels
- e. Tape scissor.

## **B. Make your own Solar System**

Use ideas given on page no – 120 of your book and make a beautiful solar system. I am very excited to see your creativity when the school reopens.